

Rugby Maths

Challenge Cards



Rugby Maths Challenge Cards


Can you name the 3d shapes that make these two rugby objects?



Rugby Maths Challenge Cards

How many rugby players are there?

Try counting in twos.



Rugby Maths Challenge Cards

Look carefully at this photo of a rugby stadium. What shapes can you find in the photo?



The first match of a tournament will take place on the 4th of February at: 14:15.

14:15

What time does the match start in words?

A rugby team can put 15 of their players on the field at one time. 7 players are selected to be substitute players on the bench.



How many players are in the team altogether?

Joel and Lucas go to the rugby match with £10. They buy a team flag for £3. How much money do they have left?



There are 6 teams in a tournament.



England



France



Ireland



Italy



Scotland



Wales

How many teams would there be if you halved the group?

The time in Italy is one hour ahead of England.



Italy

- At 9:23 a.m. in Italy, what time is it in England?




England

- At 5 p.m. in England, what time is it in Italy?


Put these matches of a tournament in date order:

England vs France -




11th March

Wales vs England -



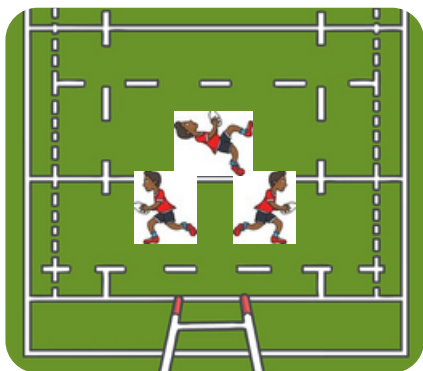
25th February

Ireland vs England -



18th March

Make each rugby player face the goal using these instructions:



half turn quarter

turn three

quarter turn left

right